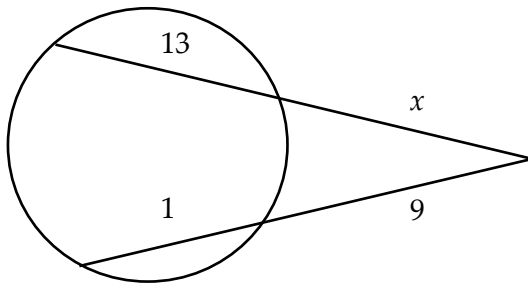
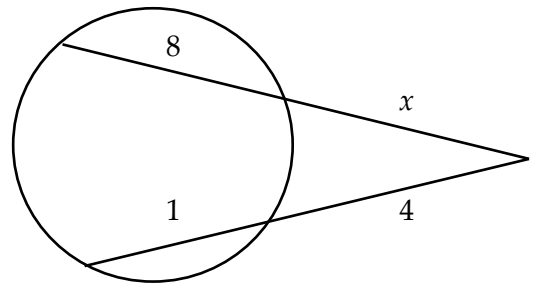


## E Michaelmas Intersecting Chord Theorem

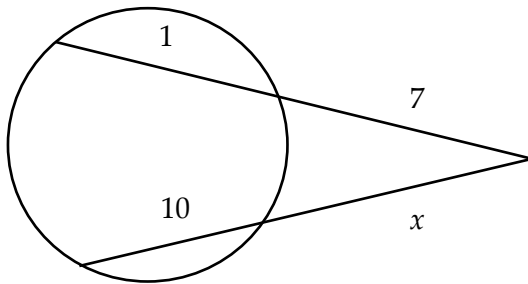
1. Find the value of  $x$  in the diagram below.



3. Find the value of  $x$  in the diagram below.



2. Find the value of  $x$  in the diagram below.



4. Find the value of  $x$  in the diagram below.

